



HILLSIDE PRIMARY SCHOOL-NAALYA
BEGINNING OF TERM THREE EXAMINATION

2022

SOCIAL STUDIES WITH RELIGIOUS EDUCATION (SET TWO)

Time Allowed: 2 Hours 15 Minutes

Index No.

--	--	--	--	--	--	--	--	--

Candidate's Name.....

Candidate's Signature.....

EMIS No..... Stream

District Name.....

Read the following instructions carefully

1. The paper has **two** sections: **A** and **B**. Section A has 40 questions and Section B has 15 questions
2. Answer **all** questions. All answers to both sections **A** and **B** must be written in the spaces provided.
3. **All** answers must be written using a blue or black ball-point pen or fountain pen. Any work written in pencil other than graphs and diagrams will not be marked
4. Unnecessary changes in work may lead to loss of marks.
5. Any handwriting that cannot easily be read may lead to loss of marks.
6. Do not fill anything in boxes indicated: "**For Examiners' Use Only**" and those inside the paper.

FOR EXAMINERS' USE ONLY		
Qn. No.	MARKS	EXRS' NO
1-10		
11-20		
21-30		
31-40		
41- 43		
44- 46		
47- 49		
50- 52		
53- 55		
TOTAL		

1 Turn Over

SECTION A: (40 MARKS)

1. Mention any one example of a natural resource in your community.

.....

2. Which earth's movement results into day and night?

.....

3. How was a dog important in the life of early man?

.....

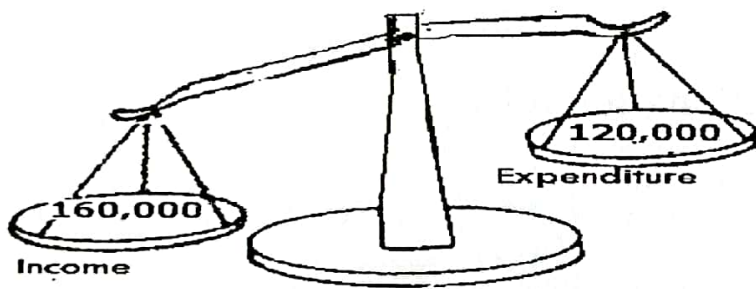
4. Give any one social reason why pastoral tribes keep large herds of animals.

.....

5. Name the body that organizes national elections in Uganda

.....

6. State any one advantage of having a budget illustrated below.



.....

7. Why is Kenya's tourism more developed than Uganda's tourism?

.....

.....


8. Write one reason why a Stevenson screen should be painted white?

.....

9. Why are drums not commonly used for communication in modern society?

.....

10. Name the tribe that was greatly affected by the white settlers in Kenya.
.....
11. Give any one way of controlling soil erosion in hilly areas.
.....
12. How does a high rate of industrialization affect population distribution?
.....
13. Why are there many animals in the savannah regions of Africa?
.....
14. Give any one advantage of growing clonal coffee over other types of coffee.
.....
.....
15. State any one factor that led to the Hehe rebellion in Tanganyika.
.....
16. Write one weather condition that greatly affects water transport.
.....
17. Mention one factor to consider before setting up a dairy farm.
.....
18. Draw a road sign of a roundabout in the space below.



19. Why did Sir Gerald Portal raise the Union Jack in Uganda in 1893?

.....

20. Mention the social activity done to initiate the Bagisu boys into adults.

.....

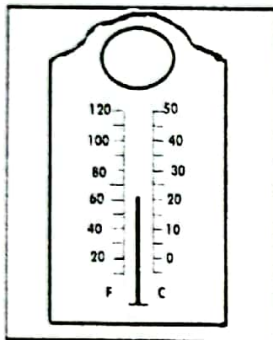
21. What type of climate in Africa receives rainfall mainly in summer?

.....

22. Write any one way farmers misuse swamps in their community

.....

23. How useful is the weather instrument below to people who study weather?



.....

24. Why are camels commonly used in desert areas for transport?

.....

25. Name the cash crop that offers raw materials to the textile industries.

.....

26. Give one way the Legislative Council was unfair to Ugandans before 1945.

.....

27. How was the indirect rule system used by the British in Uganda?

.....

28. Under which type of family do we find parents and their biological children only?

.....

29. How is sugarcane growing made possible in Kilombero valley of Tanzania?
.....
30. Mention any one example of a health service provider in our communities.
.....
31. How did Dr. Kwame Nkrumah contribute to the growth of Pan-Africanism?
.....
32. What was the first railway line to be constructed in East Africa?
.....
33. How did the Arab traders contribute to the growth of trade in E. Africa?
.....
34. Write any one problem faced by people living in mountainous areas.
.....
35. Mention any one indicator of democratic rule in Uganda today.
.....

For questions 36 – 40, answer either Christianity or Islamic but not both

36. **Either:** Why did God create light on the first day of creation?
.....
- Or:** Why did Allah create light on the first day of creation?
.....
37. **Either:** Write one way man has failed to live by God's standards.
.....

Or: Write one way man has failed to live in Allah's standards.

38. **Either:** Give any one similarity between Christianity and ATR.

Or: Give any one similarity between Islam and ATR.

39. **Either:** Who is regarded as the first martyr in Christianity?

Or: Who is regarded as the first martyr in Islam?

40. **Both:** Give any one problem faced by marriage partners.

SECTION B (60 MARKS)

41. (a) Give any one reason why mining is called an industry.

(b) State the main product obtained from the following minerals.

(i) Phosphates

(ii) Soda ash

(c) Why should good roads be constructed in areas linking to mining grounds?

42. (a) What was the main trade item of the Banyoro in long distance trade?

.....

(b) Why did traders walk in large groups during the long distance trade?

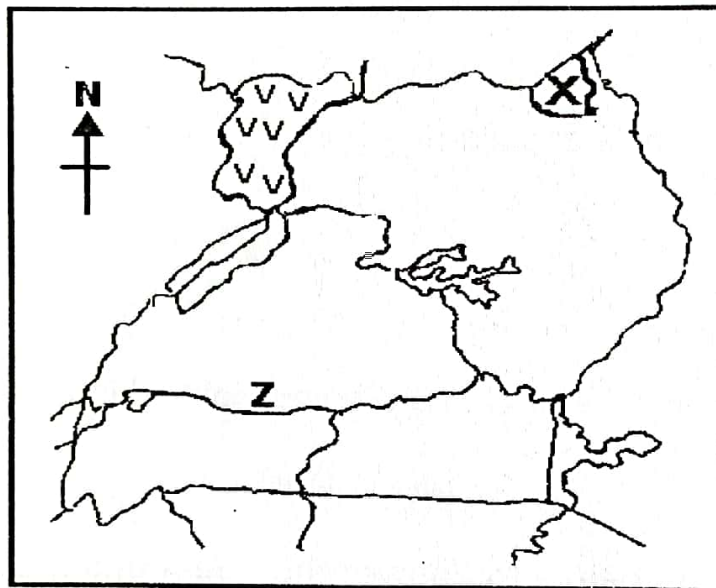
.....

(c) Mention any two effects of long distance trade to the people who participated in it.

(i)

(ii)

43. Study the map and answer the questions that follow.



(a) Mention the main tourist attraction in Game Park marked X

.....

(b) How is river marked Z important to people in that area?

.....

(c) What is the main product made from the crop grown in region marked VV?

.....

(d) State any one economic challenge faced by the country above.

.....

44. (a) What do we call the tools of power give to a King at coronation?

.....

(b) Give any two examples of such tools given to a king at coronation.

(i)

(ii)

(c) How are kingdoms important in a country like Uganda?

.....

45. (a) Who is a child according to the current Uganda National Constitution?

.....

(b) State any two examples of children rights in Uganda.

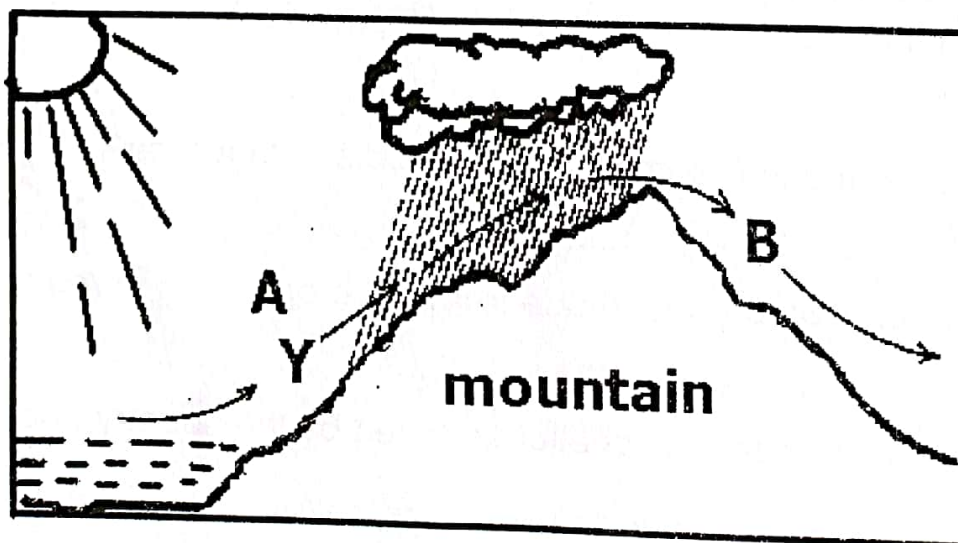
i)

ii)

(c) Give any one way children rights are being violated in Uganda today.

.....

46. Use the illustration below to answer the questions that follow.



a) Mention one type of rainfall besides the one illustrated above.

.....

b) Why does side **A** receive more rainfall than side **B**?

.....

c) Write any one process involved in the above process.

.....

d) Why does side **A** in the above drawing favour human settlement?

.....

47. (a) What is the highest peak of mountain Kilimanjaro?

.....

(b) How were the following mountains in Africa formed?

i) Drakensberg mountains

ii) Cape ranges

(c) Why shouldn't people settle on slopes of active volcanic mountains?

.....

48. (a) Name the bank that controls all commercial banks in Uganda.

.....

(b) State any two roles played by the above bank.

i)

ii)

(c) Why do people in modern communities keep their money in banks?

.....

49. (a) Why should independent countries have national symbols?

.....

(b) Write any two examples of national symbols apart from a national constitution?

i)

ii)

(c) State any one importance of a national constitution.

.....

50. a) Match the following.

- | | |
|----------------------|----------------------|
| (a) Bantu | Karimojong and Iteso |
| (b) Plain Nilotes | Baganda and Basoga |
| (c) Hamites | Sabiny and Nandi |
| (d) Highland Nilotes | Galla and Somali |

(a) Bantu

(b) Plain Nilotes

(c) Hamites

(d) Highland Nilotes

For questions 53 – 55 answer either Christianity or Islamic but not both

51. **Either:** (a) Why did God create man in his image?

.....

(b) How did God punish the following for disobedience?

i) Adam

ii) Eve

(c) Give any one effect of the disobedience of Adam and Eve to mankind.

.....

Or: (a) Why did Allah create man in his image?

.....

(b) How did Allah punish the following for their disobedience?

i) Adam

ii) Haawa

(c) Give any one effect of the disobedience of Adam and Haawa to mankind.

.....

52. **Either:** (a) Name the servant of God who was called through a burning bush.

.....

(b) Why did God call the servant named in (a) above.

.....

c) Write two plagues God gave the Egyptians in order to free the Israelites.

i)

ii)

Or: (a) Name the servant of Allah who was called through a burning bush.

.....

(b) Why did Allah call the servant named in (a) above.

.....

c) Write two plagues Allah gave to people of Msiri to free the Ban Israel.

i)

ii)

53. Either: (a) What term is used to mean a community of believers in Christ?

.....

(b) Give any two ways in which Christians reconcile.

i)

ii)

(c) Give any one cause of misunderstandings in Christian communities today.

.....

Or: (a) What term means a community that follows Islamic teachings?

.....

(b) Give any two ways in which Moslems reconcile.

i)

ii)

(c) Give any one cause of misunderstandings in Muslim communities today.

.....

54. Either: (a) Give any two talents a Christian can use to serve God.

i)

ii)

(b) Mention any two ways Christians use their talents to benefit the community.

- i)
- ii)

Or: (a) Give any two talents a Muslim can use to serve Allah.

- i)
- ii)

(b) Mention any two ways Muslims use their talents to benefit the community.

- i)
- ii)

55: For All Candidates: What are voluntary organizations?

.....
.....

b) Write any two religious organizations that offer free services to people.

- i)
- ii)

c) How voluntary organizations support the development of a country?

.....

END